

Heredity and Evolution

Case Study Based Questions

Case Study 1

The most obvious outcome of the reproductive process is the generation of individuals of similar design, but in sexual reproduction they may not be exactly alike. The resemblances as well as differences are marked. The rules of heredity determine the process by which traits and characteristics are reliably inherited. Many experiments have been done to study the rules of inheritance.

Read the above passage carefully and give the answer of the following questions:

- Q1. Why an offspring of human being is not a true copy of his parents in sexual reproduction?
- Q2. While performing experiments on inheritance in plants, what is the difference between F_1 and F_2 generation?
- Q3. Why do we say that variations are useful for the survival of a species over time?

Or

Study Mendel's cross between two plants with a pair of contrasting characters.

RRYY	×	rryy
Round Yellow		Wrinkled Green

He observed 4 types of combinations in F_2 generation. Which of these were new combinations? Why do new features which are not present in the parents, appear in F_2 generation? (CBSE 2023)

Answers

1. Because in sexual reproduction, both the father and mother contribute practically equal amounts of genetic material to the offspring. Thus, each trait is influenced by both paternal and maternal DNA.



2. F_1 generation is produced by the breeding of two parental organisms while F_2 generation is produced by the interbreeding of two F_1 generation offsprings.

3. Variations are useful for the survival of a species over time as variation makes species more adapted to survive and grow in the changing environmental conditions. If a population of reproducing organisms were suited to a particular niche and if the niche were drastically altered, the population could be wiped out. However, if some variations were to be present in a few individuals in these populations, there would be some chance for them to survive. Variation is thus useful for the survival of species over time.

Or

Round green and wrinkled yellow were the new combinations. In crossing, if two or more traits are involved, the factors responsible for each pair of traits separate and behave independently in F_2 generation irrespective of the combinations present in parents. So, new features appear in F_2 generation.

Case Study 2

Sahil performed an experiment to study the inheritance pattern of genes. He crossed tall pea plants (TT) with short pea plants (tt) and obtained all tall plants in F_1 generation.

Read the above passage carefully and give the answer of the following questions:

Q1. What will be set of genes present in the F_1 generation?

Q2. Given reason why only tall plants are observed in F_1 progeny.

Q3. When F_1 plants were self-pollinated, a total of 800 plants were produced. How many of these would be tall, medium height or short plant? Give the genotype of F_2 generation.

Or

When F_1 plants were cross-pollinated with plants having tt genes, a total of 800 plants were produced. How many of these would be tall, medium height or short plants? Give the genotype of F_2 generation. (CBSE SQP 2022 Term-2)

Answers

1. Genes present in F_1 generation is Tt.

2. It is so because tallness (T) is a dominant trait and short (t) is a recessive trait in pea plants.

3. When F₁ plants were self-pollinated, both tall and short traits are expressed in F₂ generation in the ratio 3:1.

Thus, 600 plants will be tall and 200 plants will be short.

The genotype of F₂ generation is $\frac{TT}{1} : \frac{Tt}{2} : \frac{tt}{1}$

Or

	t	t
T	Tt	Tt
t	tt	tt

In this cross, 400 tall (Tt) and 400 short (tt) will be produced.

The genotype of F₂ generation is $\frac{Tt}{1} : \frac{tt}{1}$

Case Study 3

Pooja has green eyes while her parents and brother have black eyes. Pooja's husband Ravi has black eyes while his mother has green eyes and father has black eyes.

Read the above passage carefully and give the answers of the following questions:

Q1. On the basis of the above given information, is the green eye colour a dominant or recessive trait? Justify your answer.

Q2. What is the possible genetic makeup of Pooja's brother's eye colour?

Q3. What is the probability that the offspring of Pooja and Ravi will have green eyes?

Also, show the inheritance of eye colour in the offspring with the help of a suitable cross.

Or

50% of the offspring of Pooja's brother are green eyed. With help of cross show how this is possible? (CBSE SQP 2022-23)

Answers

1. Green eye colour is recessive trait as it will express only in homozygous condition.

2. BB, Bb



3. $bb \times Bb$

Gametes	B	b
b	Bb	bb
b	Bb	bb

50% of the offsprings can have green eye colour.

Or

Brother is heterozygous (Bb) and wife is green (bb). $bb \times Bb$

Gametes	B	b
b	Bb	bb
b	Bb	bb

50% of the offsprings can have green eye colour as per the cross shown.

Case Study 4

Figures (a) to (d) given below represent the type of ear lobes present in a family consisting of 2 childrens-Rahul. Nisha and their parents.



Excited by his observation of different types of ear lobes present in his family, Rahul conducted a survey of the type of ear lobes found {Figures (e) and (f)} in his classmates. He found two types of ear lobes in his classmates as per the frequency given below:

Sex	Free	Attached
Male	36	14
Female	31	10

On the basis of above data, answer the following questions:

Q1. Which of the two characteristics-'free ear lobe' or 'attached ear lobe' appears to be dominant in this case? Why?

Q2. Is the inheritance of the free ear lobe linked with sex of the individual? Give reason for your answer.

Q3. What type of ear lobe is present in father, mother, Rahul and his sister Nisha? Write the genetic constitution of each of these family members which explains the inheritance of this character in this family.

(Gene for Free ear lobe is represented by F and gene for attached ear lobe is represented by f for writing the genetic constitution).

Or

Suresh's parents have attached ear lobes. What type of ear lobe can be seen in Suresh and his sister Siya? Explain by giving the genetic composition of all. (CBSE SQP 2023-24)

Answers

1. Free ear lobe is dominant because it is found in a large majority of the population.

2. No, it is not sex linked. As per the data of the family as well as the class, it is indicated that free ear lobe is present in males as well as in females.

3. Father-Ff (free ear lobe), Mother-Ff (free ear lobe), Rahul-ff (attached ear lobe) and Nisha-Ff (free ear lobe).

Or

Suresh's father-ff (attached ear lobe), mother-ff (attached ear lobe), Suresh-ff (attached ear lobe). Siya-ff (attached ear lobe). If both parents have recessive character, then all the children can have recessive character only.

Case Study 5

Sex determination is the method by which distinction between males and females is established in a species. The sex of an individual is determined by specific chromosomes. These chromosomes are called sex chromosomes. X and Y chromosomes are called sex chromosomes. The normal chromosomes other than the sex chromosomes of an individual are known as autosomes.

Read the above passage carefully and give the answer of the following questions:

Q1. A normal baby girl receives her X chromosome from whom: mother, father, both mother and father or either from mother or father?

Q2. A couple has six daughters. What is the possibility of them having a girl next time?

Q3. Do genetic combination of mothers play a significant role in determining the sex of a new born?

Q4. Which vital function is not controlled by autosomes?

Answers

1. From both mother and father.

2. The possibility of having a girl or boy child is equal i.e.. 50%, as 50% male gametes are Y type and 50% are Xtype.

3. No, because mothers have a pair of X chromosomes. All children will inherit an X chromosome from their mother regardless of whether they are boys or girls.

4. Sex of a child is not controlled by autosomes.



Solutions for Questions 6 to 15 are Given Below

Case Study 6

Read the following and answer any four questions from 1(i) to 1(v).

Sex determination is the method by which distinction between males and females is established in a species. The sex of an individual is determined by specific chromosomes. These chromosomes are called sex chromosomes or allosomes. X and Y chromosomes are called sex chromosomes. The normal chromosomes other than the sex chromosomes of an individual are known as autosomes.

- (i) In XX-XO type of sex determination
 - (a) females produce two different types of gametes
 - (b) males produce two different types of gametes
 - (c) females produce gametes with Y chromosome
 - (d) males produce gametes with Y chromosome.
- (ii) A couple has six daughters. What is the possibility of their having a girl next time?
 - (a) 10%
 - (b) 50%
 - (c) 90%
 - (d) 100%
- (iii) Number of autosomes present in liver cells of a human female is
 - (a) 22 autosomes
 - (b) 22 pairs
 - (c) 23 autosomes
 - (d) 23 pairs.
- (iv) XX-XO type of sex determination and XX-XY type of sex determination are the examples of
 - (a) male heterogamety
 - (b) female heterogamety
 - (c) male homogamety
 - (d) both (b) and (c).
- (v) Select the incorrect statement.
 - (a) In male grasshoppers, 50% of sperms have no sex chromosome.
 - (b) Female fruitfly is heterogametic.
 - (c) Human male produces two types of sperms 50% having X chromosome and 50% having Y chromosomes.
 - (d) In turtle, sex determination is regulated by environmental factors.











Case Study 7

Read the following and answer any four questions from 2(i) to 2(v).

Gregor Mendel conducted hybridisation experiments on garden peas for seven years and proposed the laws of inheritance in living organisms. He investigated characters in the garden pea plant that were manifested as two opposing traits, e.g., tall or dwarf plants, yellow and green seeds, etc.

- (i) Among the seven pairs of contrasting traits in pea plant as studied by Mendel, the number of traits related to flower, pod and seed respectively were
(a) 2, 2, 2 (b) 2, 2, 1 (c) 1, 2, 2 (d) 1, 1, 2.
- (ii) The colour based contrasting traits in seven contrasting pairs, studied by Mendel in pea plant were
(a) 1 (b) 2 (c) 3 (d) 4.
- (iii) Refer to the given table of contrasting traits in pea plants studied by Mendel.

Character	Dominant trait	Recessive trait
(i) Seed colour	 Yellow	 Green
(ii) Flower colour	 Violet	 White
(iii) Pod shape	 Full	 Constricted
(iv) Flower position	 Axial	 Terminal

Which of the given traits is correctly placed?

- (a) (i), (ii) and (iii) only
(b) (ii), (iii) and (iv) only
(c) (ii) and (iii) only
(d) (i), (ii), (iii) and (iv)
- (iv) Some of the dominant traits studied by Mendel were
(a) round seed shape, green seed colour and axial flower position
(b) terminal flower position, green pod colour and inflated pod shape
(c) violet flower colour, green pod colour and round seed shape
(d) wrinkled seed shape, yellow pod colour and axial flower position.
- (v) Which of the following characters was not chosen by Mendel?
(a) Pod shape (b) Pod colour
(c) Position of flower (d) Position of pod

Case Study 8

Read the following and answer any four questions from 3(i) to 3(v).

Mendel crossed tall and dwarf pea plants to study the inheritance of one gene. He collected the seeds produced as a result of this cross and grew them to generate plants of the first hybrid generation which is called the first filial progeny or F_1 . Mendel then self pollinated the tall F_1 plants and he obtained F_2 generation.

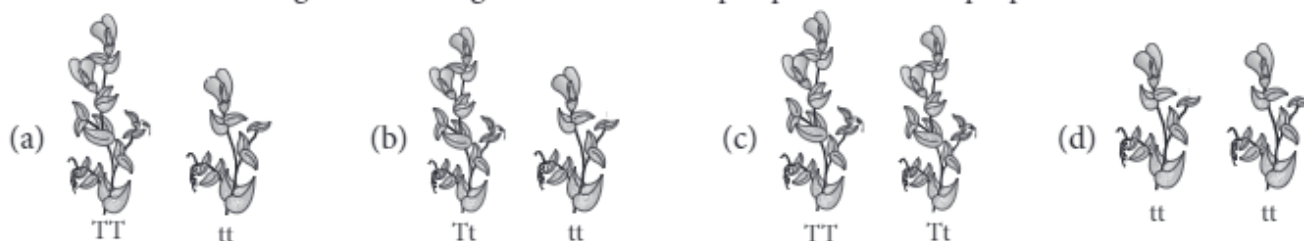
- (i) In garden pea, round shape of seeds is dominant over wrinkled shape. A pea plant heterozygous for round shape of seed is selfed and 1600 seeds produced during the cross are subsequently germinated. How many seedlings would have non-parental phenotype?

(a) 1600 (b) 1200 (c) 400 (d) 800

- (ii) If 'A' represents the dominant gene and 'a' represents its recessive allele, which of the following would be the most likely result in the first generation offspring when Aa is crossed with aa?

(a) All will exhibit dominant phenotype.
(b) All will exhibit recessive phenotype.
(c) Dominant and recessive phenotypes will be 50% each.
(d) Dominant phenotype will be 75%.

- (iii) Which of the following crosses will give tall and dwarf pea plants in same proportions?



- (iv) What result Mendel would have got, if he self pollinated a homozygous tall F_2 plant?

(a) TT and Tt (b) All Tt
(c) All TT (d) All tt

- (v) In plant, tall phenotype is dominant over dwarf phenotype, and the alleles are designated as T and t, respectively. Upon crossing one tall and one dwarf plant, total 250 plants were obtained, out of which 124 displayed tall phenotype and rest were dwarf. Thus, the genotype of the parent plants were

(a) $TT \times TT$ (b) $TT \times tt$ (c) $Tt \times Tt$ (d) $Tt \times tt$

Case Study 9

Read the following and answer any four questions from 4(i) to 4(v).

The cross that include the inheritance of two pairs of contrasting characters simultaneously is referred as dihybrid cross. Mendel chose pure breeding plants for yellow and green seeds and round and wrinkled shape of seeds. He cross pollinated the plant having yellow round seeds with plant having green wrinkled seeds. All the plants produced in F_1 generation were having, yellow round seeds. The plants raised from these seeds were self pollinated, that resulted in production of plants having four phenotypically different types of seeds.

- (i) When a cross is made between a yellow round seeded plant ($YyRr$) and a yellow wrinkled seeded plant ($Yyrr$), what is true regarding the proportions of phenotypes of the offsprings in F_1 generation?

	Proportion of yellow wrinkled seeds	Proportion of green wrinkled seeds
--	-------------------------------------	------------------------------------

- | | | |
|-----|-----|-----|
| (a) | 3/8 | 1/8 |
| (b) | 2/8 | 1/8 |
| (c) | 1/8 | 3/8 |
| (d) | 2/8 | 2/8 |

(ii) How many types of gametes can be produced by YYrr?

- (a) 1 (b) 2 (c) 3 (d) 4

(iii) In Mendelian dihybrid cross, when heterozygous tall plant with green seeds are self crossed the progenies are

- (a) TtYy, TtYY, TTYy (b) TtYy, TTYy, ttyy
(c) TtYy, ttyy (d) TtYy, TTYy.

(iv) When round yellow seeded heterozygous pea plants are self fertilised, the frequency of occurrence of RrYY genotype among the offsprings is

- (a) 9/16 (b) 3/16 (c) 2/16 (d) 1/16.

(v) The percentage of yr gamete produced by YyRr parent will be

- (a) 25% (b) 50% (c) 75% (d) 12.5%.

Case Study 10

Read the following and answer any four questions from 5(i) to 5(v).

In human, the allele for brown eyes (B) is dominant over that for blue eyes (b). A brown eyed woman marries a blue eyed man, and they have six children. Four of the children are brown eyed and two of them are blue eyed.

(i) What is the genotype of blue eyed offspring?

- (a) BB (b) Bb
(c) bb (d) Cannot be determined

(ii) What is the woman's genotype?

- (a) BB (b) Bb
(c) bb (d) Cannot be determined

(iii) The ovum, produced by the mother carries the gene regarding eye colour is

- (a) BB (b) Bb
(c) B or b (d) B only.

(iv) The ratio of brown eyed children to blue eyed children in this family is 2 : 1, which deviates from typical phenotypic ratios for monohybrid inheritance. What might be the reason?

- (a) Gametes carrying the brown eyed allele are more viable than those with the blue eyed allele.
(b) A different pattern of inheritance other than monohybrid inheritance is involved.
(c) Not all of their babies survived childbirth, thus causing a distortion in the actual ratio.
(d) The actual ratio differs from the expected ratio because the sample size is too small.

(v) What is the gene carried by of the man's sperm regarding the eye colour?

- (a) BB (b) Bb
(c) b only (d) b or B



Case Study 11

Read the following and answer any four questions from 6(i) to 6(v).

Purebred pea plant with smooth seeds (dominated characteristic) were crossed with purebred pea plant with wrinkled seeds (recessive characteristic). The F_1 generation was self pollinated to give rise to the F_2 generation.

- (i) What is the expected observation of the F_1 generation of plants?
- (a) 1/2 of them have smooth seeds and 1/2 of the have wrinkled seeds.
(b) 1/4 of them have wrinkled seeds and 3/4 of them have smooth seeds.
(c) 3/4 of them have wrinkled seeds and 1/4 of them have smooth seeds.
(d) All of them have smooth seeds.
- (ii) What is the expected observation of the F_2 generation of plants?
- (a) 1/2 of them have smooth seeds and 1/2 of them have wrinkled seeds.
(b) 1/4 of them have wrinkled seeds and 3/4 of them have smooth seeds.
(c) 3/4 of them have wrinkled seeds and 1/4 of them have smooth seeds.
(d) All of them have smooth seeds.
- (iii) If a genotype consists of different types of alleles, it is called
- (a) homozygous (b) heterozygous (c) monoallelic (d) uniallelic.
- (iv) The alternative form of gene is called
- (a) dominant character (b) recessive character (c) alternative genes (d) allele.
- (v) Which of the following will be the genotypic ratio of given F_2 generation?
- (a) 1 : 3 (b) 3 : 1 (c) 1 : 2 : 1 (d) 1 : 1 : 1

Case Study 12

Read the following and answer any four questions from 7(i) to 7(v).

In fruitflies, the gene for wing shape has two alleles, an unusual allele for curled wings (c) and the normal allele for straight wings (C). The given phenotypes are observed for each genotype.

Genotype	Phenotype
CC	Normal, straight wings
Cc	Wings curled up at the ends, has difficulty flying
cc	Unable to hatch from egg

- (i) Which of the following crosses would produce live offspring from 50% of the eggs?
- (a) $CC \times Cc$ (b) $CC \times CC$ (c) $CC \times cc$ (d) $Cc \times cc$
- (ii) Which of the following crosses would be able to produce offspring that would fly normally from 50% of the egg?
- (a) $CC \times Cc$ (b) $Cc \times Cc$ (c) $CC \times cc$ (d) $Cc \times cc$
- (iii) Two curly winged flies are crossed, and they produce 150 eggs. What is the proportion of straight-winged flies expected among the live offspring?
- (a) 25% (b) 33% (c) 50% (d) 75%
- (iv) Normal straight winged flies are self crossed and they produce 120 eggs. What is the proportion of curly winged flies expected among the live offspring?
- (a) 25% (b) 75% (c) 0% (d) 100%



(v) Which of the following crosses would be able to produce offspring that has curled wings only?

(a) $CC \times Cc$

(b) $CC \times cc$

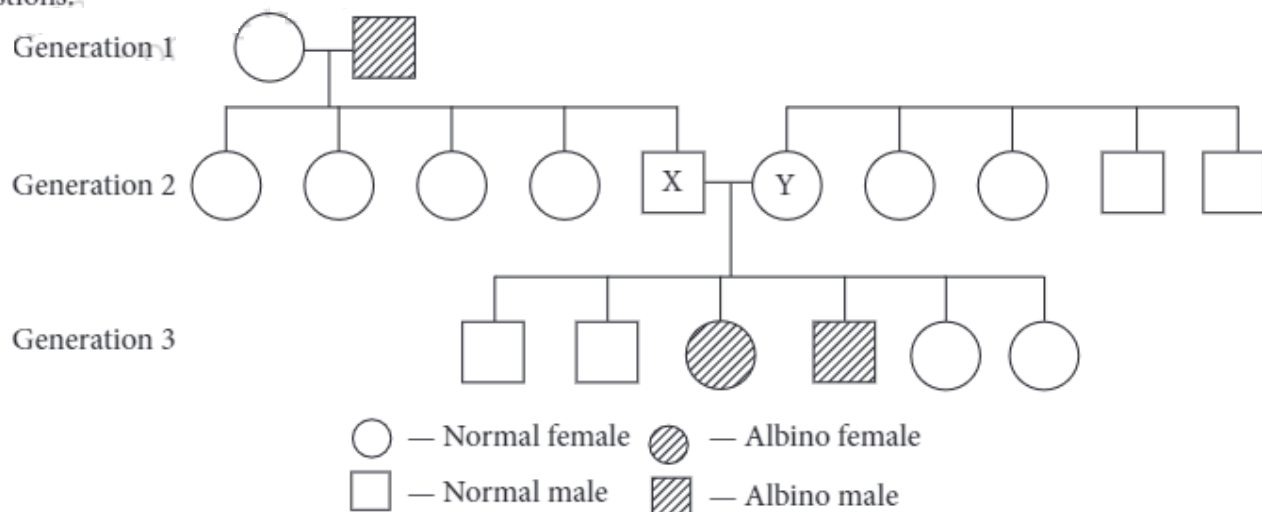
(c) $Cc \times Cc$

(d) $Cc \times cc$

Case Study 13

Read the following and answer any four questions from 8(i) to 8(v).

Refer to the schematic representation of the albinism that is an inherited condition caused by recessive allele (a). 'A' is the dominant allele for the normal condition. The inheritance of certain genetic traits for two or more generations is represented in a pedigree or family tree. Study the given pedigree chart and answer the following questions.



(i) Which of the following could be the genotypes of X and Y?

X

Y

(a) AA

AA

(b) AA

Aa

(c) Aa

Aa

(d) aa

aa

(ii) Which of the following could be the genotype of generation - 1 male and female?

Male

Female

(a) AA

aa

(b) aa

AA

(c) Aa

aa

(d) AA

AA

(iii) If X married an albino female, then what is the probability that their children would be albino?

(a) 0

(b) 0.125

(c) 0.25

(d) 0.5

(iv) If Y married a normal homozygous male, then what is the probability that their children would be albino?

(a) 0

(b) 0.125

(c) 0.25

(d) 0.5

(v) Which of the following could be the genotype of offsprings produced by cross of X and Y?

(a) AA, Aa, aa

(b) aa, aa

(c) Aa, Aa

(d) AA, AA

Case Study 14

Read the following and answer any four questions from 9(i) to 9(v).

Refer to the given table regarding results of F_2 generation of Mendelian cross.

Plants with round and yellow coloured seeds (P)	315
Plants with round and green coloured seeds (Q)	108
Plants with wrinkled and yellow coloured seeds (R)	101
Plants with wrinkled and green coloured seeds (S)	32

- (i) Which of the following would be the phenotype of F_1 generation regarding given data of F_2 generation?
- Plants with round and yellow coloured seeds.
 - Plants with round and green coloured seeds.
 - Plants with wrinkled and yellow coloured seeds.
 - Plants with wrinkled and green coloured seeds.
- (ii) Which of the following would be the genotype of parental generation regarding given result of F_2 generation?
- YYRR and yyrr
 - YYRR and YYRR
 - YYRR and YyRr
 - YyRr and YyRr
- (iii) If plant with wrinkled and green coloured seeds (S) is crossed with plant having wrinkled and yellow coloured seeds (R), what will be the probable phenotype of offsprings?
- All plants with wrinkled and yellow coloured seeds.
 - 50% plants with wrinkled and yellow coloured seeds and 50% plants with wrinkled and green coloured seeds.
 - All plants with wrinkled and green coloured seeds.
 - Both (a) and (b)
- (iv) Which of the following will result when plant YyRr is self-pollinated?
- 9 : 3 : 3 : 1 ratio of phenotypes only
 - 9 : 3 : 3 : 1 ratio of genotypes only
 - 1 : 1 : 1 : 1 ratio of phenotypes only
 - 1 : 1 : 1 : 1 ratio of phenotypes and genotypes
- (v) The percentage of yR gamete produced by YyRR parent will be
- 25%
 - 50%
 - 75%
 - 12.5%

Case Study 15

Read the following and answer any four questions from 10(i) to 10(v).

Pea plants can have smooth seeds or wrinkled seeds. One of the phenotypes is completely dominant over the other. A farmer decides to pollinate one flower of a plant with smooth seeds using pollen from plant with wrinkled seeds. The resulting pea pod has all smooth seeds.

- (i) Which of the following conclusions can be drawn?
- The allele for smooth seeds is dominated over that of wrinkled seeds.
 - The plant with smooth seeds is heterozygous.
 - The plant with wrinkled seeds is homozygous.
- 1 only
 - 1 and 2 only
 - 1 and 3 only
 - 1, 2 and 3



- (ii) Which of the following crosses will give smooth and wrinkled seeds in same proportion?
(a) $RR \times rr$ (b) $Rr \times rr$ (c) $RR \times Rr$ (d) $rr \times rr$
- (iii) Which of the following cross can be used to determine the genotype of a plant with dominant phenotype?
(a) $RR \times RR$ (b) $Rr \times Rr$ (c) $Rr \times RR$ (d) $RR \times rr$
- (iv) On crossing of two heterozygous smooth seeded plants (Rr), a total of 1000 plants were obtained in F_1 generation. What will be the respective number of smooth and wrinkled seeds obtained in F_1 generation?
(a) 750, 250 (b) 500, 500 (c) 800, 200 (d) 950, 50
- (v) The characters which appear in the first filial generation are called
(a) recessive characters (b) dominant characters
(c) lethal characters (d) non-mendelian characters.



HINTS & EXPLANATIONS

6. (i) (b) : In XX-XO type and XX-XY type of sex determining mechanisms, males produce two different types of gametes, either with or without X-chromosome (XO type), or some gametes with X-chromosome and some with Y-chromosome (XY type). Such type of sex determination mechanism is designated to be the example of male heterogamety. In both, females are homogametic and produce X type of gametes in both the cases and have XX genotype.



(ii) (b): The possibility of having a girl or boy child is equal i.e., 50%, as 50% male gametes are Y type and 50% are X type. Fusion of egg with X type sperm will produce a girl child.

(iii) (b): In humans, number of autosomes are $2n = 44$ or 22 pairs regardless of the sex.

(iv) (a): Refer to answer 1 (i).

(v) (b): Male fruitfly is heterogametic whereas female fruitfly is homogametic.

7. (i) (a): Characters studied by Mendel are as follows:

	Trait studied	Dominant	Recessive
1.	Plant height	Tall (T)	Dwarf (t)
2.	Flower position	Axial (A)	Terminal (a)
3.	Flower colour	Violet (V) or (W)	White (v) or (w)
4.	Pod shape	Full or Inflated (I) or (C)	Constricted (i) or (c)
5.	Pod colour	Green (G) or (Y)	Yellow (g) or (y)
6.	Seed shape	Round (R) or (W)	Wrinkled (r) or (w)
7.	Seed colour	Yellow (Y) or (G)	Green (y) or (g)

(ii) (c): Refer to answer 2 (i).

(iii) (d): Refer to answer 2 (i).

(iv) (c): Refer to answer 2 (i).

(v) (d): Refer to answer 2 (i).

8. (i) (c): Since this pea plant is heterozygous for round shape, its genotype would be Rr.

Parents : Rr × Rr

↓ (selfing)

Progeny : RR Rr Rr rr

Phenotypically, the ratio will be 3 : 1, i.e., only rr seedlings will show wrinkled seed phenotype, rest will show round seed shape.

1200 → Round shape (RR, Rr)

400 → Wrinkled (rr)

(ii) (c): 'A' represents the dominant gene and 'a' represents its recessive allele. The most likely result in the first generation offspring when Aa is crossed with aa is :

Parents : Aa × aa

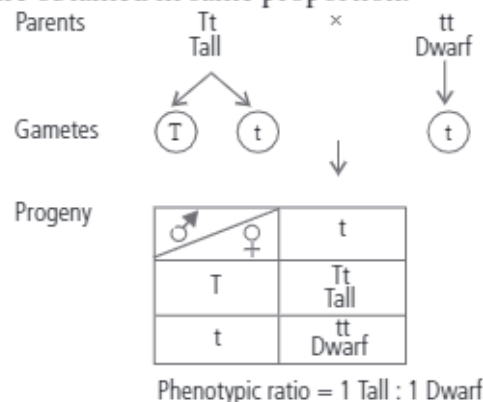
Gametes : A a a a

F₁ : Aa Aa aa aa

Hence, Aa : aa

1 : 1

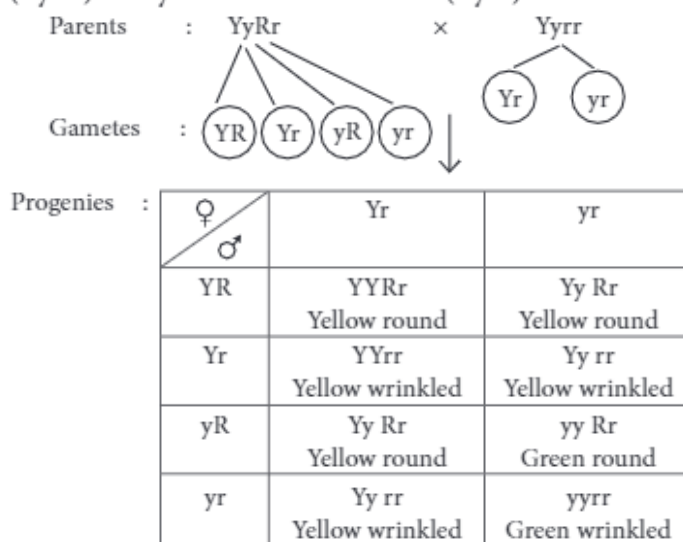
(iii) (b): This is an example of a test cross in which a cross is made between heterozygous tall and homozygous dwarf individuals and tall and dwarf plants are obtained in same proportion.



(iv) (c): Self pollination of homozygous tall F₂ plant (TT) will give rise to all individuals of genotype TT.

(v) (d)

9. (i) (a): A cross between yellow round seeds (YyRr) and yellow wrinkled seeds (Yyrr) will be:



Phenotypic ratio is :

Yellow round seeds : Yellow wrinkled seeds : Green round seeds : Green wrinkled seeds
: : 3 : 3 : 1 : 1 or 3/8, 3/8, 1/8, 1/8

(ii) (a)

(iii) (b)

(iv) (c): Round yellow heterozygous pea plant may be represented by genotype RrYy. On selfing such plants following results will be obtained.

Parents:	♂	RrYy	×	♀	RrYy
		(Round Yellow)			(Round Yellow)
Gametes :		(RY) (Ry) (rY) (ry)			(RY) (Ry) (rY) (ry)
Offsprings:	♀ \ ♂	(RY)	(Ry)	(rY)	(ry)
	(RY)	RRYY	RRYy	RrYY	RrYy
	(Ry)	RRYy	RRyy	RrYy	Rryy
	(rY)	RrYY	RrYy	rrYY	rrYy
	(ry)	RrYy	Rryy	rrYy	rryy

Hence, total 16 genotypes will be obtained in the next generation out of which the frequency of occurrence of RrYY genotype is 2, as illustrated by the given Punnett square chart.

(v) (a): Gametes produced by YyRr parent would be 25% YR, 25% yR, 25% Yr and 25% yr.

10. (i) (c)

(ii) (b): According to the given passage some children show recessive trait, i.e., homozygous. So, the woman must be heterozygous.

(iii) (c): Human ova are haploid, hence they only contain one copy of each gene. Since the woman has a Bb genotype her ova would contain either B or b allele.

(iv) (d): According to the given passage, within a single family, the sample size of offspring in each generation is very small. Hence, the actual phenotypic and genotypic ratios often deviate from expected ratios. It is only when sample sizes of offspring is large that actual ratios approach theoretical or expected ratios more closely.

(v) (c): Human sperm is haploid, hence they only contain one copy of each gene. Since the man has a bb genotype, his sperm would contain allele b only.

11. (i) (d)

(ii) (b)

(iii) (b): Factors representing the alternate or same form of a character are called alleles. In heterozygous individuals or hybrids, a character is represented by two contrasting alleles. Out of the two contrasting alleles, only one is able to express its effect in the individual. It is called dominant allele. The other allele which does not show its effect in the heterozygous individual is called recessive allele, e.g., in case of hybrid tall pea plants (Tt). 'T' is dominant allele whereas 't' is recessive allele.

(iv) (d): Refer to answer 6 (iii).

(v) (c): In given case, genotypic ratio of F₂ progeny will be 1 : 2 : 1 where, one is homozygous dominant, two are heterozygous dominant and one is homozygous recessive.

12. (i) (d)

(ii) (a)

(iii) (a): 25% of the total number of eggs will not hatch (genotype cc). 50% of the offspring will be curly-winged (Cc) and 25% of the offspring are straight-winged (CC).

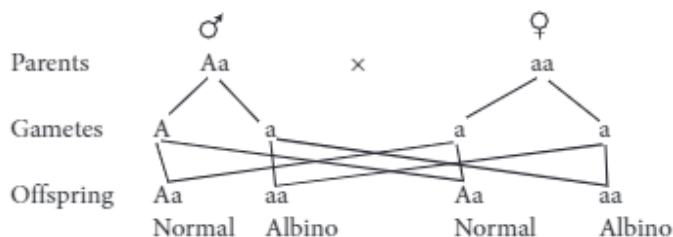
(iv) (c)

(v) (b)

13. (i) (c) X and Y parents must have 'a' allele (recessive) that is respective for albinism, the genotype of both X and Y individuals would be Aa and Aa as they are normal and 3rd generation, normal and albino male and female is formed in 3 : 1 ratio.

(ii) (b): Albinism is caused by the recessive allele. The children of generation-1, male and female all are normal (Aa). So, in generation-1, the genotype of female must be AA as she is normal and genotype of male is aa as he is albino male.

(iii) (d): Albinism is caused by the recessive allele and father of X is albino male so, the genotype of X is Aa and genotype of albino female is aa. So, the probability that their children would be albino is 50%.



(iv) (a)

(v) (a)

14.(i) (a)

(ii) (a)

(iii) (d): Plant with wrinkled and green coloured seeds (S) (genotype rryy) is crossed with plant with wrinkled and yellow coloured seeds (R) (genotype rrYY or rrYr). If plant with wrinkled and green coloured seeds (rryy) is crossed with plant having wrinkled and

yellow coloured seeds of genotype rrYY then all plants produced with wrinkled and yellow coloured seeds whereas if plant with wrinkled and green coloured seeds (rryy) is crossed with plant having wrinkled and yellow coloured seeds that has genotype rrYy then 50% plants with wrinkled and yellow coloured seeds and 50% plants with wrinkled and green coloured seeds are produced.

(iv) (a): When plant YyRr is self pollinated, 9:3:3:1 ratio of phenotypes will be observed. This can be explained as follows:

Parents : YyRr × YyRr

Progenies :

♀ \ ♂	YR	Yr	yR	yr
YR	YYRR Yellow round	YYRr Yellow round	YyRR Yellow round	YyRr Yellow round
Yr	YYRr Yellow round	YYrr Yellow Wrinkled	YyRr Yellow round	Yyrr Yellow Wrinkled
yR	YyRR Yellow round	YyRr Yellow round	yyRR Green round	yyRr Green round
yr	YyRr Yellow round	Yyrr Yellow Wrinkled	yyRr Green round	yyrr Green Wrinkled

Phenotypic ratio = 9 yellow and round : 3 yellow and wrinkled : 3 green and round : 1 green and wrinkled.

(v) (b): Gametes produced by YyRR parent would be 50% YR and 50% yR.

15. (i) (c)

(ii) (b)

(iii) (d)

(iv) (a): The crossing between two heterozygous smooth seeded (Rr) plants would give phenotypic ratio of 3 smooth seeded plant : 1 wrinkled seeded plant.

If plants obtained were 1000, then the number of smooth and wrinkled plants will be closed to 750 and 250 respectively.

(v) (b)